


Time to Shape Up!



Name _____


©The Mailbox®

Shapes have many **attributes**.

An attribute is _____

1

One attribute of shapes is the number of **sides**. A side is _____



2


I know a _____
has 3 sides. See?

I know a _____
has 4 sides. See?

I know a _____
has 5 sides. See?

3

Another attribute of shapes is the number of **angles**. An angle is _____



4

I know a _____
has 4 angles. See?

I know a _____
has 5 angles. See?

I know a _____
has 6 angles. See?

5

“Time to Shape Up!”

Answer Key

Page 1: a characteristic or trait of a shape

Page 2: a line segment that forms part of a polygon (closed figure)

Page 3: Drawings should represent the following shapes: triangle;
square, rectangle, rhombus, parallelogram, or trapezoid; pentagon

Page 4: the place where two rays meet and share an endpoint (vertex)

Page 5: Drawings should represent the following shapes: square,
rectangle, rhombus, parallelogram, or trapezoid; pentagon; hexagon